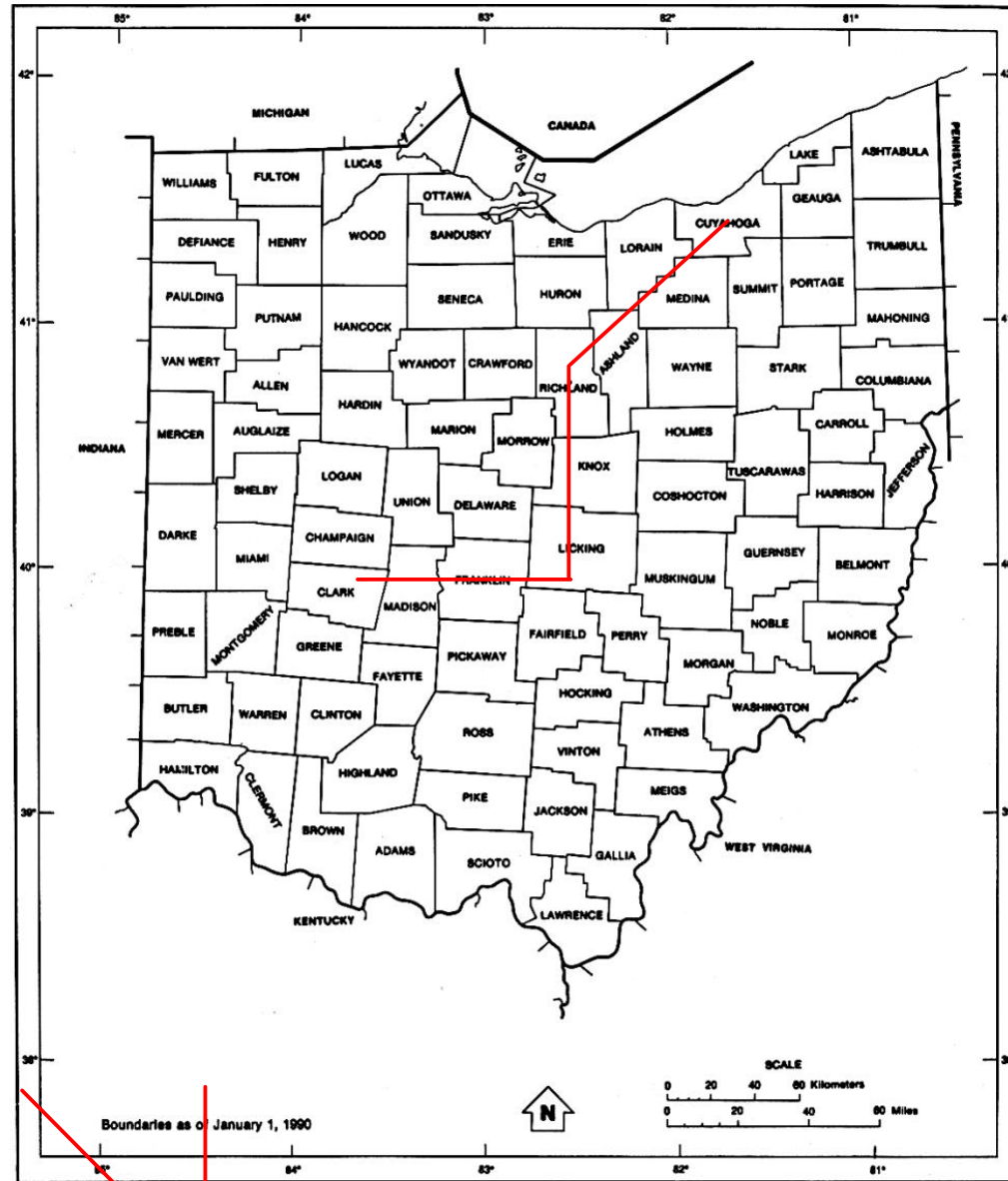


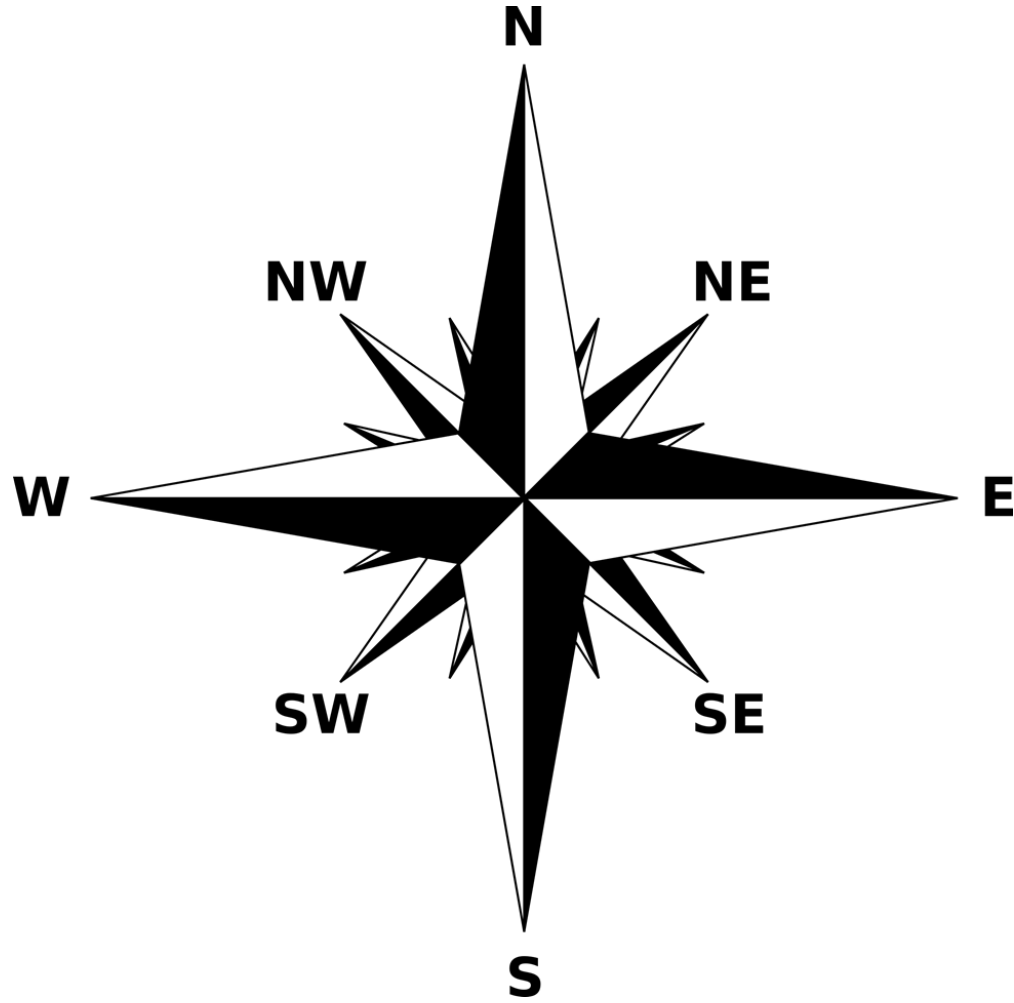


Maps Part 1	
Legend/Key	Explains what each symbol on the map represents
Scale	Shows how much a map has been reduced from the area it represents. Tells what each distance on the map represents in real life.
Direction Indicator (Compass Rose)	Usually found somewhere on the edge of a map. It shows the four cardinal directions , which are North, East, South and West.
Cartographer	A person who makes maps
Relative Location	Where it is in relation to another place (example: our school, MMS, is north of the Eastgate Shopping Center on the east side of SOM Center Road.)
Types of Maps	
<p>Political Map- shows boundaries and locations of countries, states, and major cities</p> <p>Physical Map- shows the geographic features of an area (seas, islands, mountains, lakes, rivers, deserts)</p> <p>Topographical Map- a type of physical map that shows elevation (how high a place is above sea level)</p> <p>Climate Map- shows the average monthly or yearly weather conditions</p> <p>Population Density Map- shows the amount of people that live in an area relative to the space occupied by them</p> <p>Product Map- shows the natural resources and the products made in that area</p>	



U.S. DEPARTMENT OF COMMERCE Economics and Statistics Administration Bureau of the Census
MAPS

OHIO G-1



RELATIVE LOCATION

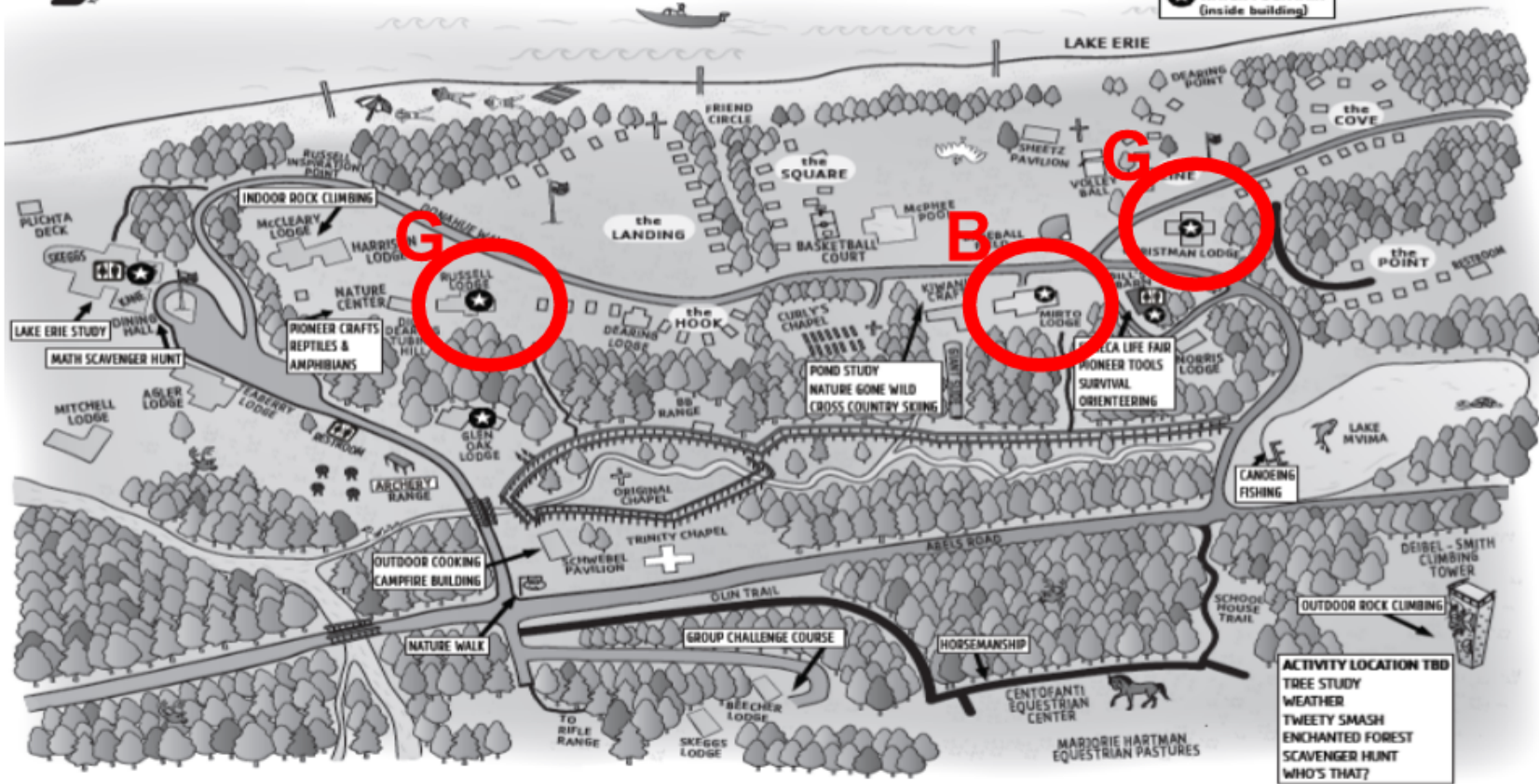
1. Africa is _____ of the Indian Ocean.
2. Australia is _____ of Asia.
3. North America is _____ of South America.
4. Antarctica is _____ of Europe.
5. The Arctic Ocean is _____ of Africa.
6. South America is _____ of Africa.
7. North America is _____ of the Atlantic Ocean.
8. Australia is _____ of Antarctica



CAMP FITCH YMCA
12600 ABELS RD
NORTH SPRINGFIELD, PA 16430
PHONE: 1-877-863-4824
WWW.CAMPFITCHYMCA.ORG

OUTDOOR EDUCATION AT CAMP FITCH YMCA

KEY:
[Bathroom icon] BATHROOMS
[Water fountain icon] WATER FOUNTAIN
(inside building)



ACTIVITY LOCATION TBD
TREE STUDY
WEATHER
TWEETY SMASH
ENCHANTED FOREST
SCAVENGER HUNT
WHO'S THAT?